



Number bonds

Colour in the correct options:

How do you make 8? 4 + 4 5 + 2 3 + 6 7 + 1

How do you make 12? 11 + 1 5 + 6 3 + 9 7 + 2

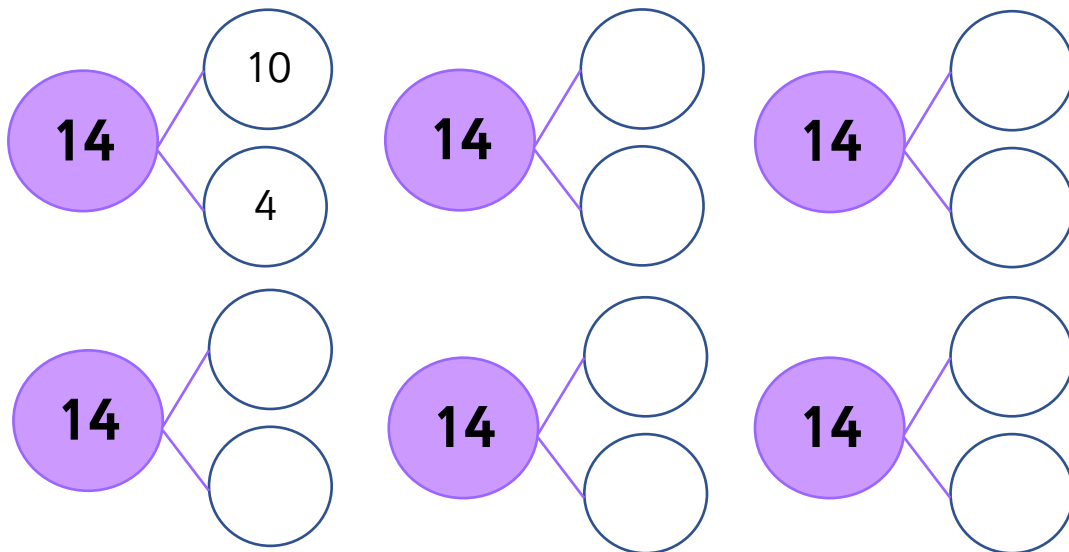
How do you make 16? 13 + 3 14 + 2 11 + 6 5 + 12

How do you make 9? 4 + 4 5 + 2 3 + 6 8 + 1

Complete the number sentences:

10 + _____ = 20 _____ + 9 = 20 _____ + 4 = 20
 _____ + 2 = 20 5 + _____ = 20 7 + _____ = 20

Fill in the spider diagrams to show the bonds of 14:



Number bonds (Memo)

Colour in the correct options:

How do you make 8? $4 + 4$ $5 + 2$ $3 + 6$ $7 + 1$

How do you make 12? $11 + 1$ $5 + 6$ $3 + 9$ $7 + 2$

How do you make 16? $13 + 3$ $14 + 2$ $11 + 6$ $5 + 12$

How do you make 9? $4 + 4$ $5 + 2$ $3 + 6$ $8 + 1$

Complete the number sentences:

$10 + 10 = 20$

$11 + 9 = 20$

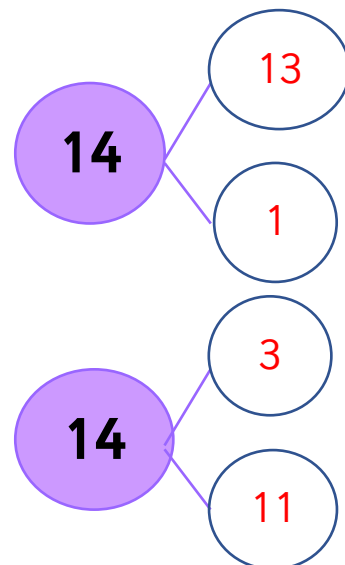
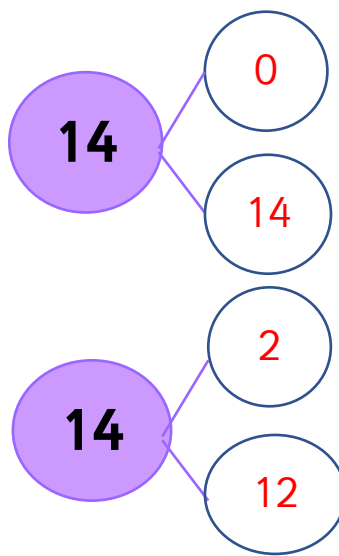
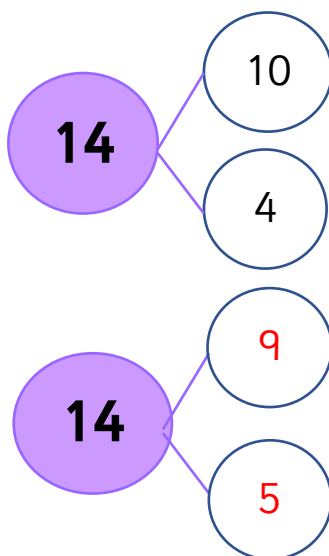
$16 + 4 = 20$

$18 + 2 = 20$

$5 + 15 = 20$

$7 + 13 = 20$

Fill in the spider diagrams to show the bonds of 14:



Also: 6 and 8; 7 and 7