



Subtraction word problems 1

study
CHAMP



Can you remember the three steps to solving word problems? Use the pictures as a clue.



Annie had **3 apples** in her bag. She ate **1 apple**. How many **apples** does she have left?

Joshua had **7 marbles**, but lost **3 marbles** at school.
How many **marbles** does he have left?


There are **8 birds** on a wire. **5 Birds** flew away. How many **birds** are left on the wire?

Subtraction word problems 2

study
CHAMP



Can you remember the three steps to solving word problems? Use the pictures as a clue.



Sam has **9 blocks** to build a tower with. **7 Blocks** have been used.
How many **blocks** does he have left?

There are **9 kids** on the bus. **5 kids** got off. How many **kids** are left on the bus?

Glen planted **12 flowers**. Only **3 flowers** are growing. How many **flowers** still need to grow?




Subtraction word problems 3

study
CHAMP



Can you remember the three steps to solving word problems? Use the pictures as a clue.




Tammy picked up **11 pieces of litter**. There were **4 cans**. How many **bottles** did she pick up?

Roelf drew **13 shapes**. He drew **8 squares**. How many **triangles** did he draw?


Sally has **9 dresses**. There are **4 pink dresses**. How many **green dresses** does she have?

Division word problems 1

study
CHAMP



Can you remember the three steps to solving word problems? Use the pictures as a clue.



Tip: Let your child use counters to work out the answers.

There are **4 dolphins** in the pond and **8 fish** to be fed to the dolphins. How many **fish** will each dolphin get?

There are **12 biscuits** on the table between **4 friends**. How many **biscuits** will each friend get?


Daddy has **12 sweets** to share between Tom and Kim. How many **sweets** will each child get?

Division word problems 2

study
CHAMP



Can you remember the three steps to solving word problems? Use the pictures as a clue.



Tip: Let your child use counters to work out the answers.


Miss. Jones has **12 stars**. She gave **5 stars** out yesterday.
How many **stars** does she have left?

Sue has **12 shoes** to give to people. How many people can she give the **shoes** to?

Jane has **9 cards** to share between **3 friends**. How many **cards** will each friend get?


Subtraction word problems 1 (Memo)

study
CHAMP



Can you remember the three steps to solving word problems?

Use the pictures as a clue.



Annie had 3 apples in her bag. She ate 1 apple. How many **apples** does she have left?



$$3 - 1 = \underline{\quad}$$

$$3 - 1 = 2$$

Annie has **2 apples** left.

Joshua had 7 marbles, but lost 3 marbles at school.
How many **marbles** does he have left?



$$7 - 3 = \underline{\quad}$$

$$7 - 3 = 4$$

Joshua has **4 marbles** left.

There are 8 birds on a wire. 5 Birds flew away. How many **birds** are left on the wire?



$$8 - 5 = \underline{\quad}$$

$$8 - 5 = 3$$

There are **3 birds** left on the wire.

Subtraction word problems 2 (Memo)

study
CHAMP



Can you remember the three steps to solving word problems?

Use the pictures as a clue.



Sam has **9** blocks to build a tower with. **7** Blocks have been used. How many blocks does he have left?



$$9 - 7 = \underline{\quad}$$

$$9 - 7 = 2$$

Sam has **2** blocks left.

There are **9** kids on the bus. **5** kids got off. How many kids are left on the bus?



$$9 - 5 = \underline{\quad}$$

$$9 - 5 = 4$$

There are **4** kids on the bus.

Glen planted **12** flowers. Only **3** flowers are growing. How many flowers still need to grow?




$$12 - 9 = \underline{\quad}$$

$$12 - 9 = 3$$

3 Flowers still need to grow.

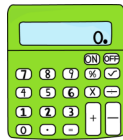
Subtraction word problems 3 (Memo)

study
CHAMP



Can you remember the three steps to solving word problems?

Use the pictures as a clue.



Tammy picked up **11** pieces of litter. There were **4** cans. How many **bottles** did she pick up?



$$11 - 4 = \underline{\quad}$$

$$11 - 4 = 7$$

Tammy picked up **7** bottles.

Roelf drew **13** shapes. He drew **8** squares. How many **triangles** did he draw?



$$13 - 8 = \underline{\quad}$$

$$13 - 8 = 5$$

Roelf drew **5** triangles.

Sally has **9** dresses. There are **4** pink dresses. How many **green** dresses does she have?



$$9 - 4 = \underline{\quad}$$

$$9 - 4 = 5$$

Sally has **5** green dresses.

Division word problems 1 (Memo)

study
CHAMP




Can you remember the three steps to solving word problems?

Use the pictures as a clue.



Tip: Let your child use counters to work out the answers.



There are **4 dolphins** in the pond and **8 fish** to be fed to the dolphins. How many **fish** will each dolphin get?



Each dolphin will get **2 fish**.

There are **12 biscuits** on the table between 4 friends. How many **biscuits** will each friend get?



Each friend will get **3 biscuits**.


Daddy has **12 sweets** to share between Tom and Kim. How many **sweets** will each child get?



Each child will get **6 sweets**.

Division word problems 2 (Memo)

study
CHAMP



Can you remember the three steps to solving word problems?

Use the pictures as a clue.



Tip: Let your child use counters to work out the answers.



Miss. Jones has **12 stars**. She gave 5 stars out yesterday. How many **stars** does she have left?



$$12 - 5 = \underline{\quad}$$

$$12 - 5 = 7$$

Miss. Jones has **7 stars** left.

Sue has **12 shoes** to give to people. How many **people** can she give the shoes to?



Sue can give shoes to **6 people**.

Jane has **9 cards** to share between 3 friends. How many **cards** will each friend get?



Each friend will get **3 cards**.