

Mental mathematics

Addition and subtraction

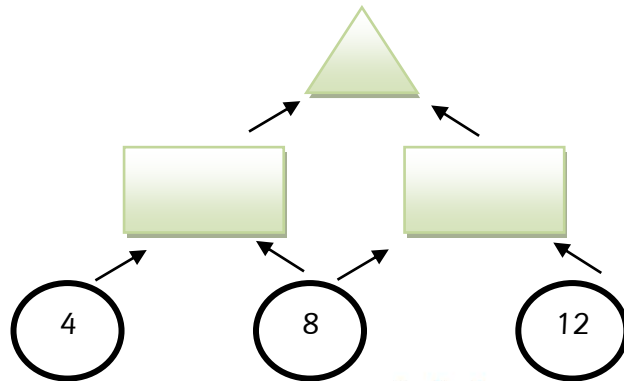
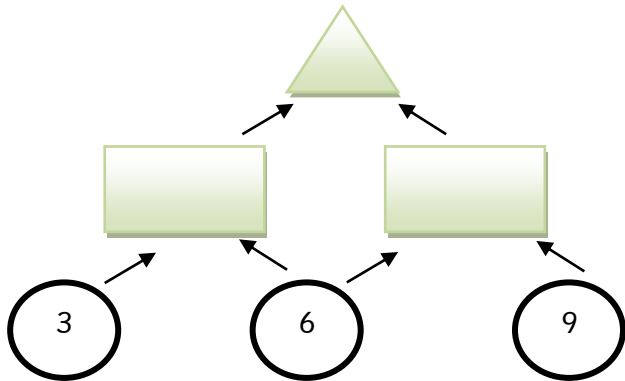

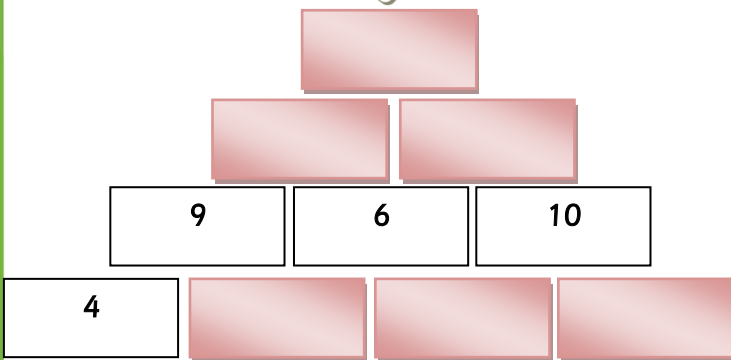


Complete the table. The first line has been done for you.

	+3	- 6	+5
7	10	4	9
12			
15			
22			



Complete the triangles below:



Mental mathematics (Memo)
Addition and subtraction



Complete the table. The first line has been done for you.

	+3	- 6	+5
7	10	4	9
12	15	6	17
15	18	9	20
22	25	16	27

