



Odd and even

Is the number of items even or odd? Colour in the correct box:




even

odd



even

odd



even

odd



even

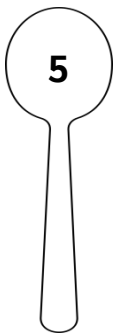
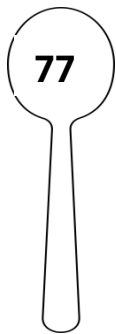
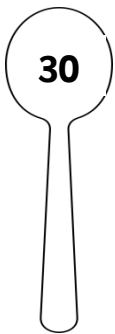
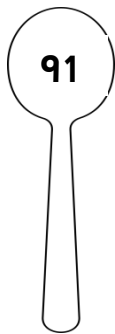
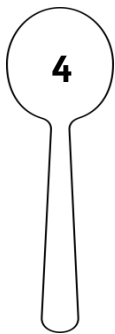
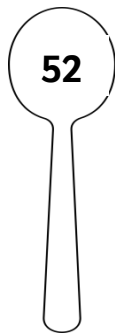
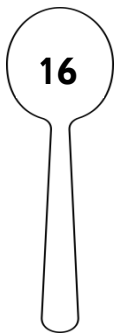
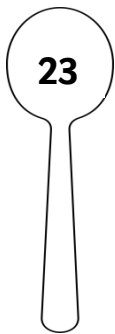
odd



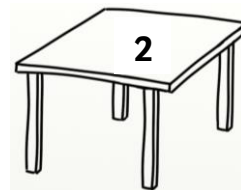
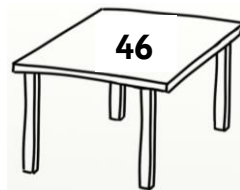


even

odd

Colour all the even numbers in blue and all the odd numbers in green:



Circle all the even numbers:



Odd and even (Memo)

Is the number of items even or odd? Colour in the correct box:




even

odd



even

odd



even

odd



even







odd



even

odd

Colour all the even numbers in blue and all the odd numbers in green:



Circle all the even numbers:

