

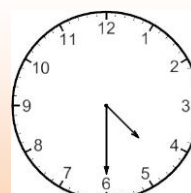
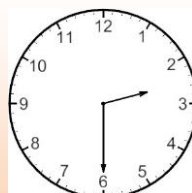
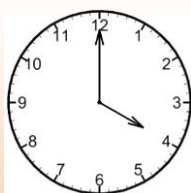
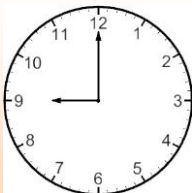


Telling Time

As easy as 1, 2, 3...



Write the time on each clock in words:

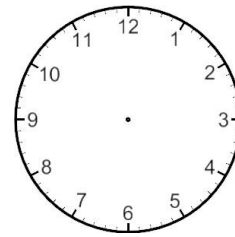
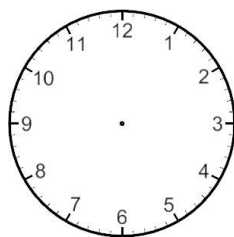
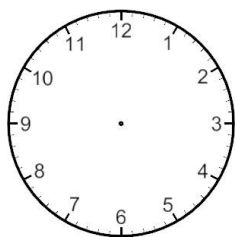


Write the following times in 12:00 digital time and draw the times on the blank clocks:

Twelve o'clock

Half past one

Half past eleven



Complete the riddles below by choosing the correct answers from the box.

- 12 24 7 52 60 365

There are _____ days in the year. There are _____ days in a week.

There are _____ minutes in an hour. There are _____ hours in a day.

There are _____ weeks in a year. There are _____ months in a year.

Telling the time (Memo)

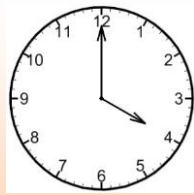
As easy as 1, 2, 3...



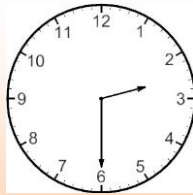
Write the time on each clock in words:




Nine o'clock



four o'clock



half past two

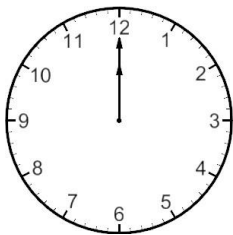


half past four

Write the following times in 12:00 digital time and draw the times on the blank clocks.

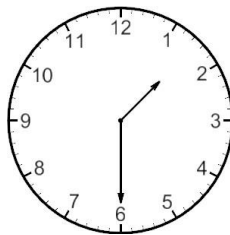
Twelve o'clock

12:00




Half past one

1:30



Half past eleven

7:30



Complete the riddles below by choosing the correct answer in the box.

12

24

7

52

60

365

There are 365 days in the year.

There are 7 days in a week.

There are 60 minutes in an hour.

There are 24 hours in a day.

There are 52 weeks in a year.

There are 12 months in a year.