



Greater than, less than

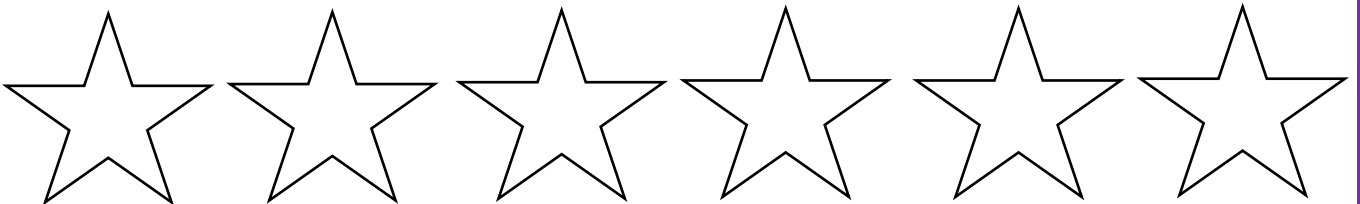
Write the numbers from the box below in the correct column in the table:

Greater than 20	Less than 20


63	22	5	17	89
14	40	39	11	2

Write the numbers in order from least to greatest:

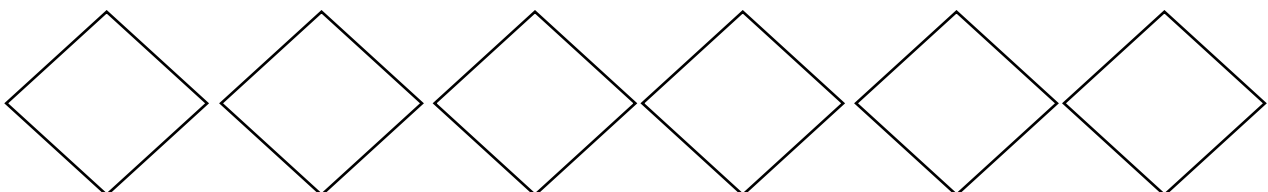
42 , 16 , 25 , 93 , 4 , 37



55 , 50 , 87 , 30 , 5 , 52



16 , 39 , 28 , 40 , 51 , 9



Greater than, less than (Memo)

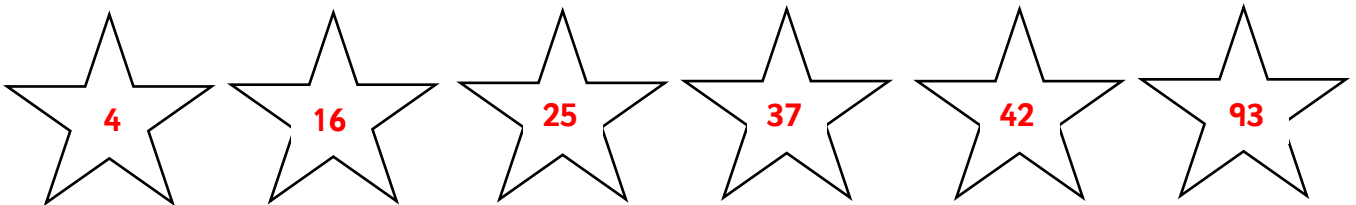
Write the numbers from the box below in the correct column in the table:

Greater than 20	Less than 20
<p>63 22 89</p> <p>40 39</p>	<p>5 17 14</p> <p>11 2</p>


63	22	5	17	89
14	40	39	11	2

Write the numbers in order from least to greatest:

42 , 16 , 25 , 93 , 4 , 37



55 , 50 , 87 , 30 , 5 , 52



16 , 39 , 28 , 40 , 51 , 9

