



Daily Maths Practice

Grade 3

Workbook 1

(Weekly counting, number words and number recognition, number value)





Weekly Counting Practice



Today you do not have to do any writing!
Practise your counting orally with your Mom.



Sophie

1

Count in 10's from number 320 to number 580.

2

Count backwards in 10's from number 470 to number 230.

3

Count in 20's from number 220 to number 360.

4

Count in 20's from number 350 to number 610.

5

Count in 25's from number 25 to number 250.

Challenging Practice



Put your
thinking
cap on!

Can you count backwards in 20's from number 680 to number 420?





Number recognition



Complete the table below by filling in the blank spaces. Use the block below to give you clues:

H = hundreds T = Tens U = Units

Number name	Number symbol	Place value
five hundred and six	506	$5H + 0T + 6U$
		$8H + 1T + 2U$
twenty six		
	427	
		$0H + 9T + 6U$
four hundred and fifty seven		
	816	

Challenging practice

Circle all the numbers you will say when you count in 3's!

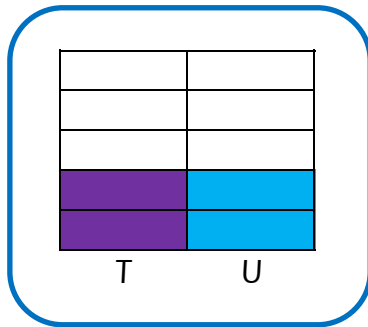
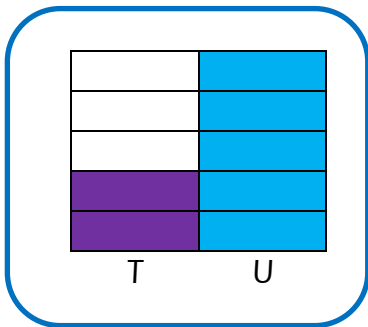
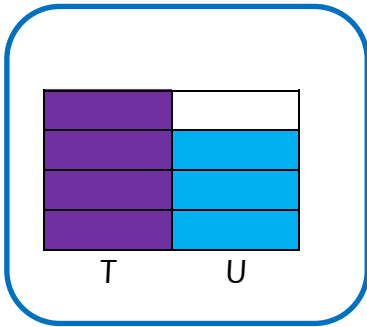
7	6	2	19	13	6	22	1	4	25
9	10	18	6	9	1	8	12	11	27
6	3	15	9	33	7	9	36	1	2



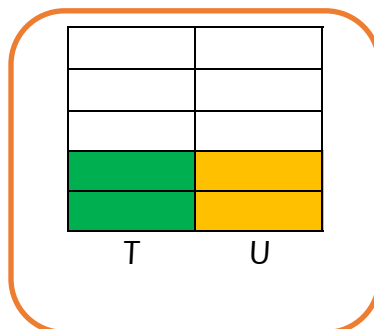
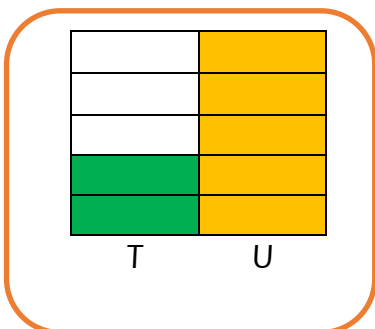
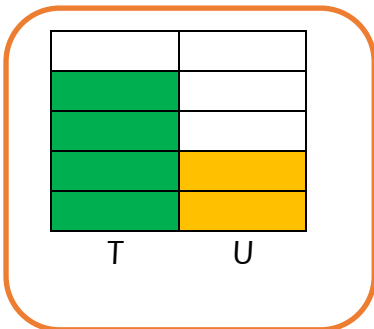
Number value




Draw a cross through the block with the biggest number value:




Draw a cross through the block with smallest number value:



Circle the biggest number in the following blocks:



Circle the smallest number in the following blocks:





Advanced practice
Do you know your numbers?



Find the missing numbers:

What number comes **BEFORE** 33?

What number comes **AFTER** 36?

What number comes **BETWEEN** 46 and 48?

What number is 20 more than 25?

What number comes **AFTER** 76?

What number comes **BEFORE** 68?

What number is 30 **SMALLER** than 96?

What number is 33 **BIGGER** than 60?

What is the **number word** for 22?

What is the **number word** for 73?

What is the **number word** for 51?

Tip for Mom:

Use the
*100 Counting
Chart*, available
under
Free Downloads on
the website to help
your child with this
exercise.



Wow!
You are such a bright spark!



Day 2: Memo

Number name	Number symbol	Place value
five hundred and six	506	$5H + 0T + 6U$
eight hundred and twelve	812	$8H + 1T + 2U$
twenty six	26	$2T + 6U$
four hundred and twenty seven	427	$4H + 2T + 7U$
ninety six	96	$0H + 9T + 6U$
four hundred and fifty-seven	457	$4H + 5T + 7U$
eight hundred and sixteen	816	$8H + 1T + 6U$

Challenging practice

Circle all the numbers you will say when you count in 3's!

7	6	2	19	13	6	22	1	4	25
9	10	18	6	9	1	8	12	11	27
6	3	15	9	33	7	9	36	1	2

Day 3: Memo

Circle the biggest number in the following blocks:

210	191	213
-----	-----	-----

196	169	181
-----	-----	-----

Biggest number value—block 1: Number value is 43

Smallest number value—block 3: Number value is 22

Circle the smallest number in the following blocks:

168	186	178
-----	-----	-----

121	114	142
-----	-----	-----

Find the missing numbers:

What number comes **BEFORE** 33? **32**

What number comes **AFTER** 36? **37**

What number comes **BETWEEN** 46 and 48? **47**

What number is 20 more than 25? **45**

What number comes **AFTER** 76? **77**

What number comes **BEFORE** 68? **67**

What number is 30 **SMALLER** than 96? **66**

What number is 33 **BIGGER** than 60? **93**

What is the **number word** for 22? **twenty two**

What is the **number word** for 73? **seventy three**

What is the **number word** for 51? **fifty one**

