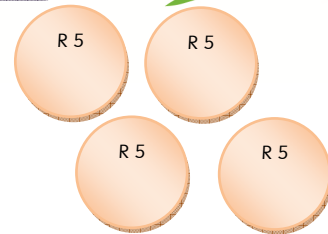
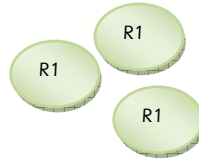
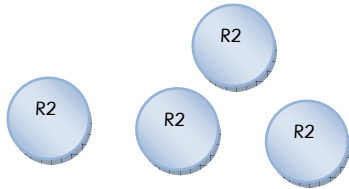




Understanding the value of Money



How many cents are in R1?

How many 20c coins make up R1?

How many 10c coins make up R1?

How many 50c coins make up R1?

Arrange the following coins from smallest to biggest:

R100 50c R2 R10 R5 20c R1
10c R50 5c R20

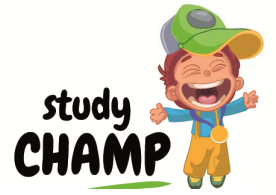
Which coins, from the options given above, can I use if I want to pay R12? Give two options.

What will be the total of all the coins together?

What is a different way of having the same amount of money, but using notes and coins mixed? Give two examples.



Money (Memo)



How many cents are in R1?

100 cents

How many 20c coins make up R1?

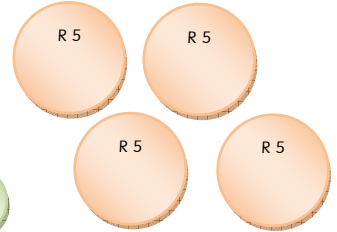
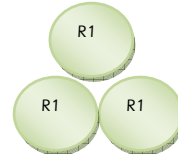
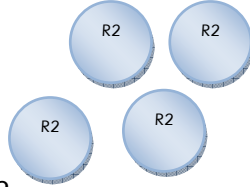
5 x 20c coins

How many 10c coins make up R1?

10 x 10c coins

How many 50c coins make up R1?

2 x 50c coins



Arrange the following money from smallest to biggest:

- R100 50c R2 R10 R5 20c R1
 10c R50 5c R20
 5c 10c 20c 50c R1 R2 R5

Which coins, from the options given above, can I use if I want to pay R12? Give two options.

2 x R5 coins and 1 x R2 coin

1 x R5 and 3 x R1 coins and 2 x R2 coins

What will be the total of all the coins together?

R31.00

What is a different way of having the same amount of money, but using notes and coins mixed? Give two examples.

1 x R10 and 1 x R20 and 1 x R1
 R13 x R10 and 1 x R1

