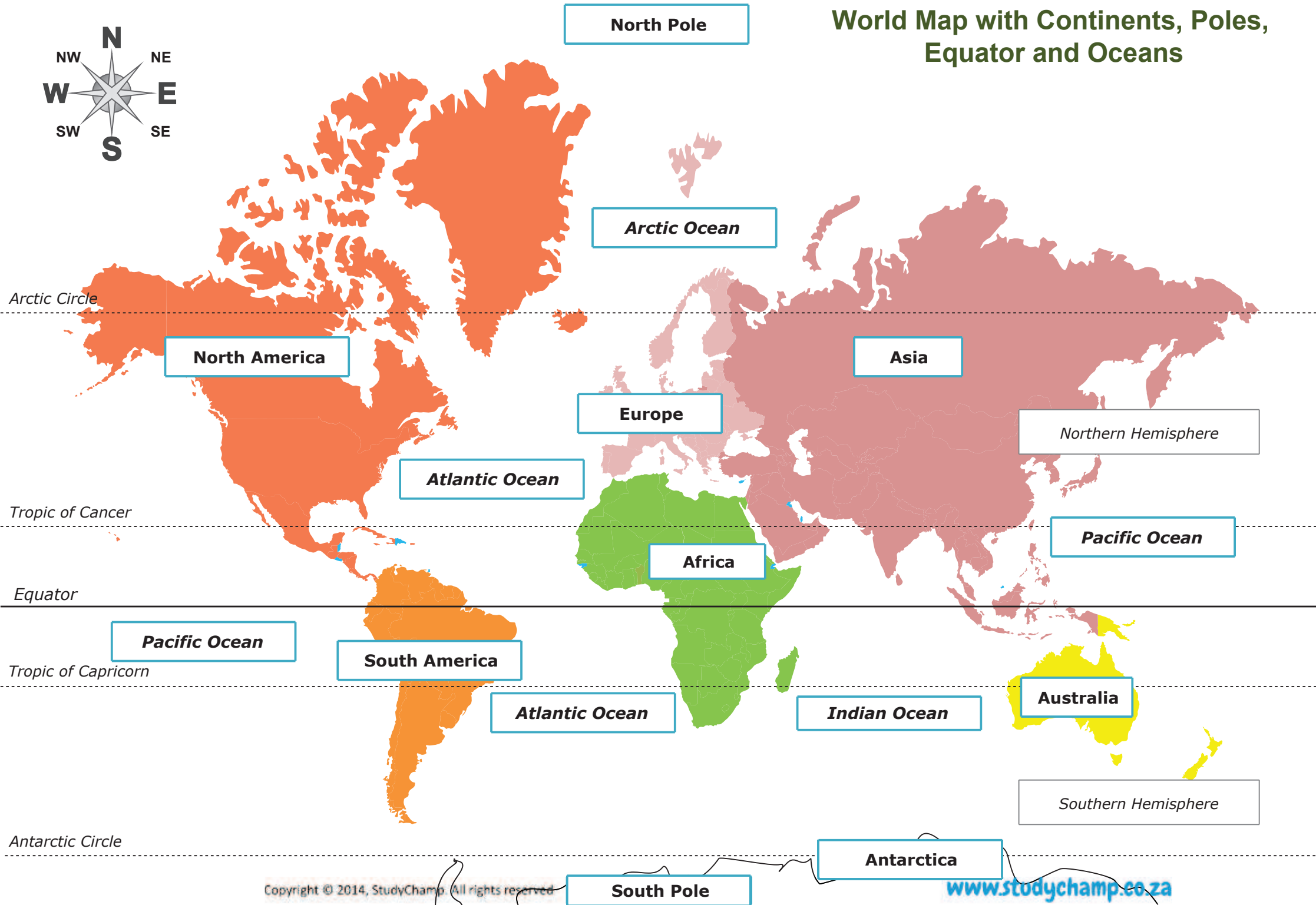

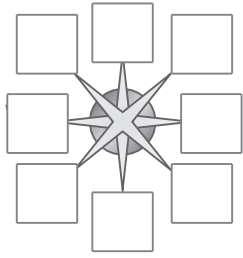
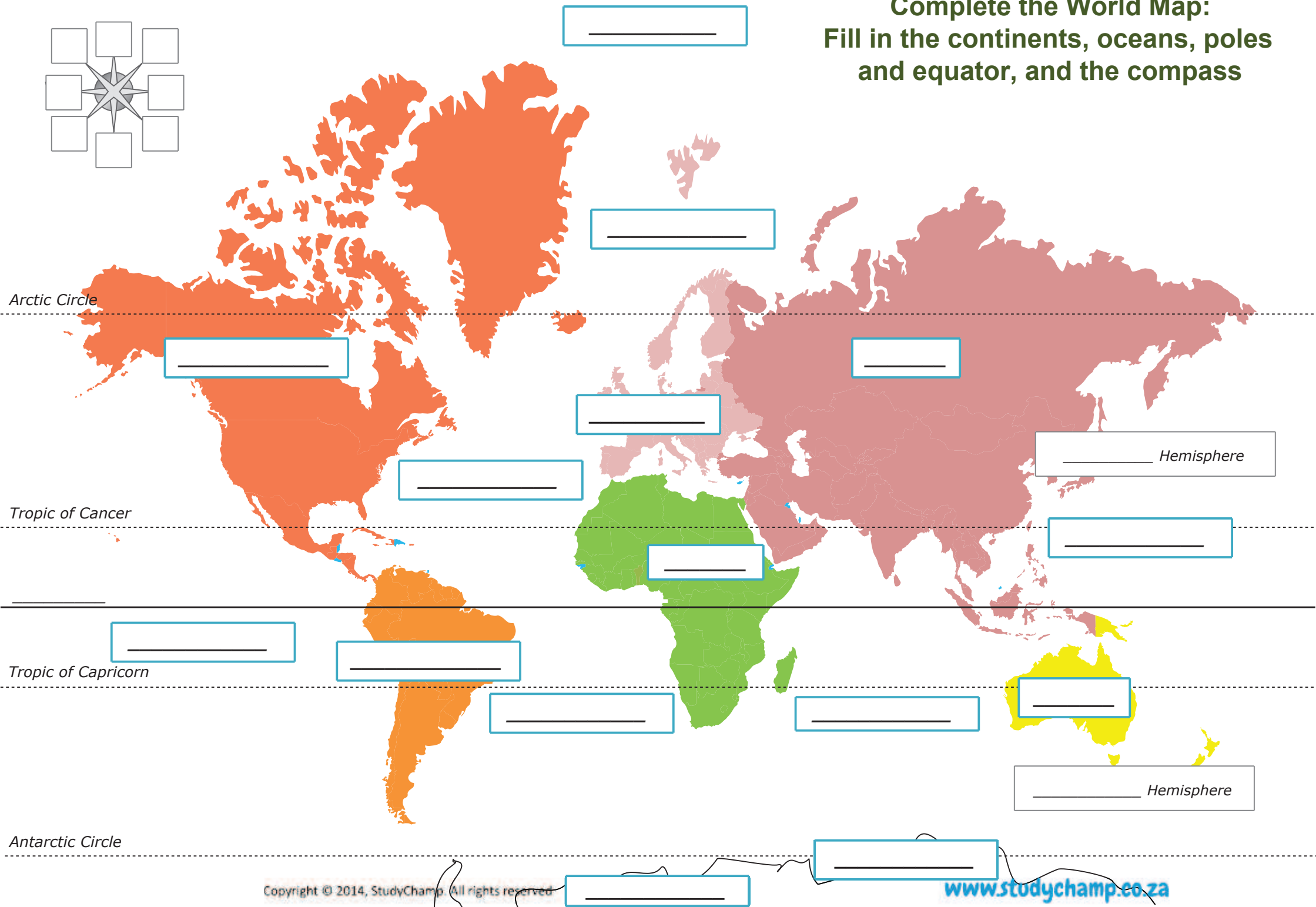


World Map with Continents, Poles, Equator and Oceans





Complete the World Map:
Fill in the continents, oceans, poles
and equator, and the compass



The Earth

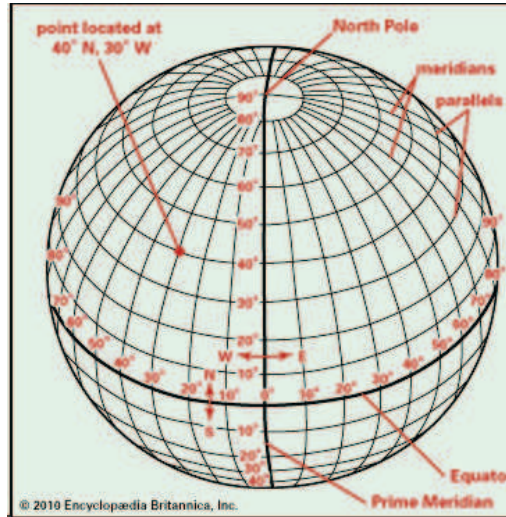
Oceans

- Between Africa and America's Atlantic
- Between America's and Asia Pacific
- Between Africa and Australia Indian
- Above Europe and Asia Arctic

Latitude

- Flat lines - from East to West
- Tropic of Cancer
- Equator
- Tropic of Capricorn
- Equator divides earth into Northern & Southern hemispheres

TIP: When its **LATE**, you want to lie flat
Latitude - flat lines



Continents

7-
in descending
order

- ASIA
- AFRICA
- NORTH AMERICA
- SOUTH AMERICA
- ANTARCTICA
- EUROPE
- AUSTRALIA

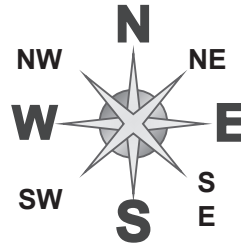
Longitude

- Long lines - from North to South
- Prime Meridian
- Divides earth into East and West

TIP: Think of something that is **LONG** (tall) as upright
Longitude Long lines

Compass

- Needle always points NORTH
- Maps always have North at top, unless compass on map shows different



Cardinal Points

- NORTH
- SOUTH
- EAST
- WEST

Intercardinal Points

- Northeast
- Southeast
- Southwest
- Northwest

Answer the following questions:

- Which famous mountain can be found at E7?

- Which river flows into the sea at G5?

- Which islands will you find at B2?

- Give the coordinates for the position where you will find the Arabian Desert.

- The Equator can be found at _____ degrees and divides the earth into a _____ and _____
- The Atlantic ocean is _____ of South Africa.
- If you are in Madagascar, you will have to fly in a _____ direction to get to Cape Town.
- If you are in Zimbabwe, the Namib Desert will be in an _____ direction from you and the Sahara desert will be in a _____ direction from you.

